



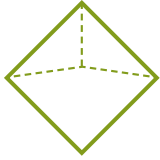

NAME _____ DATE _____

COUNT EDGES, CORNERS AND FACES.



Tick (✓) on the correct figure.

Example:

Which figure has more faces?

☐

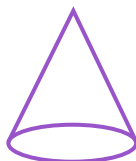
1. Which figure has more corners?

☐☐

2. Which figure has more edges?

☐☐

3. Which figure has more corners?

☐☐